



Free Printable: Turtle Towers

These talented turtles can do a trick - they balance on each other to make turtle towers, short and tall. Can you help Kazoo count how many turtles are in each tower? Write your answer on the line. Then answer the extra questions at the bottom.


tower 1




tower 2



tower 3



tower 4



Which turtle tower is the tallest?

Which turtle tower is the shortest?

How many turtles are there total in all 4 towers?

How many more turtles does tower 1 have than tower 2?

How many less turtles does tower 4 have than tower 3?

